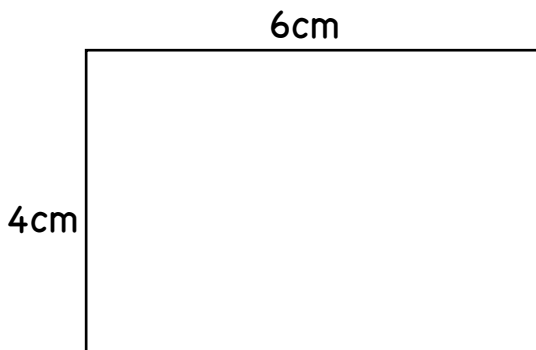


Find the Area

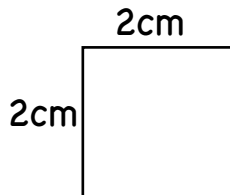
Directions: Calculate the area of the rectangles in square centimeters.



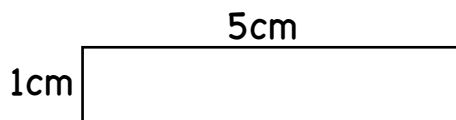
area: _____ cm^2



area: _____ cm^2



area: _____ cm^2



area: _____ cm^2