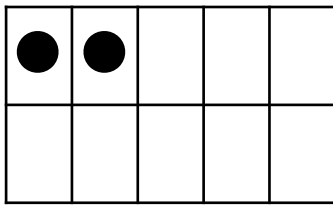



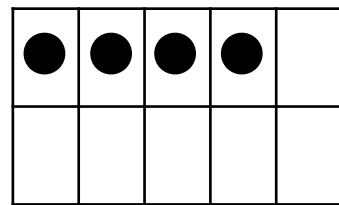
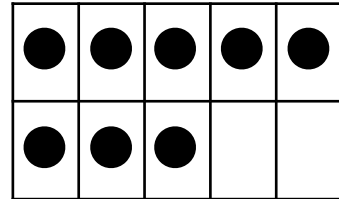


Make a 10 With D.C.

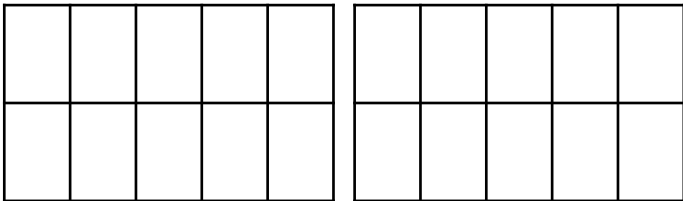
Directions: Use the ten frames to make 10. Solve the addition problem.



$$\underline{\quad} + \underline{\quad} = \underline{\quad}$$



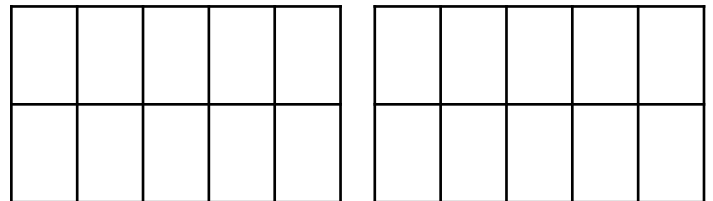
$$\underline{\quad} + \underline{\quad} = \underline{\quad}$$



$$7 + 5 = \square$$

○ ○

$$\underline{\quad} + \underline{\quad} = \underline{\quad}$$



$$9 + 8 = \square$$

○ ○

$$\underline{\quad} + \underline{\quad} = \underline{\quad}$$