



ACTIVITY GUIDE

Episode 411: Segmenting Closed Syllables

Book: Where Should Turtle Be?

Scan below to watch lesson



Match It

Draw a line from the animal to its habitat.



ocean



forest



pond



salt marsh

Words to Know

habitat - place where plants and animals live

Draw It

Draw a picture to match the sentence.

The frog jumped into the pond.



ACTIVITY GUIDE

Episode 412: Living Sunlight and Segmenting Open Syllables

Book: Living Sunlight: How Plants Bring the Earth to Life

Scan below to watch lesson



Write It

Directions: Read why something happened (cause) and write what you think happened after (effect).

Cause	Effect
I forgot to turn off the faucet in the kitchen.	
The gate to the fence was open.	
My ice cream was on the picnic table in the sun.	
I forgot to put on sunscreen.	

Draw It

Read the sentence (the cause). Draw a picture of what you think happened after (the effect).

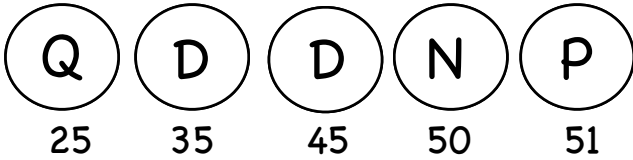
I hit a rock with my bike.

Handful of Coins

Materials: cup, coins (you can use real coins or cut out the coins in this activity)

Directions:

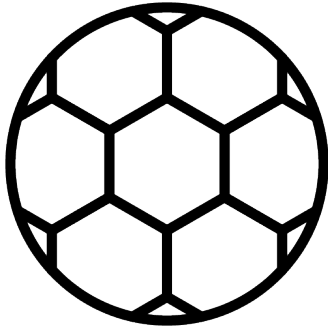
1. Put all the coins in your cup. Grab a handful of coins.
2. Sort the coins and arrange them from greatest to least value.
3. Draw a quick picture of the coins you grabbed.
4. Figure out the total value of the coins. Show your work.
5. Record how many of each type of coin you grabbed and the total value.
6. Repeat 4 times.

Quick Draw	How many of each type of coin did you grab?	Total
example: 	I grabbed 1 quarter, 2 dimes, 1 nickel and 1 penny.	51¢

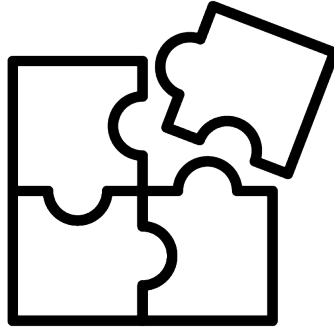





The Toy Store




soccer ball
\$1.00



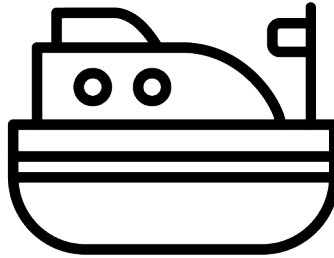
puzzle
15¢



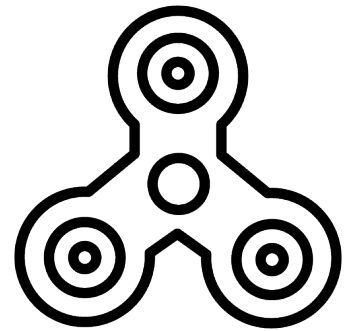
airplane
25¢




castle
99¢




boat
20¢



fidget spinner
30¢



bear
39¢



robot
75¢

I bought three robots and a soccer ball. How much did I spend?

I bought two toys and spent 40¢. What might I have bought?

I bought a castle and a fidget spinner and gave the shopkeeper 6 quarters. How much change did I receive?

You buy a boat and four airplanes. How much do you spend?

Ben buys 2 robots and a puzzle. How much change will he get from a 5 dollar bill?

I buy one bear and two castles. How much do I spend?

Choose any one item from the store. Show what coins you could use to pay the exact cost.

Choose any two items from the store. Show what coins you could use to pay the exact cost.

You buy five puzzles. How much change do you get from a one dollar bill?

I spent \$1.19 at The Toy Store. What might I have bought?